

Şekil Sayı Eşleştirme

→
= 6

▽
= 1

○
= 2

☆
= 8

⬠
= 9

□
= 3

◇
= 7

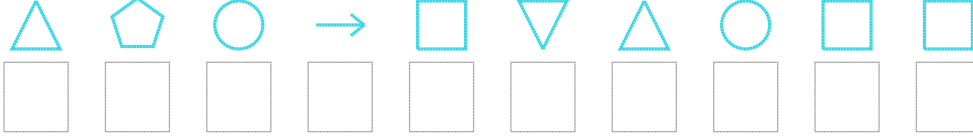
△
= 0

×
= 4

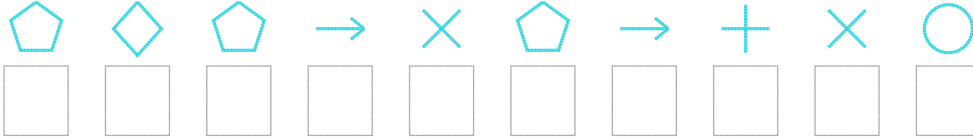
÷
= 5

Aşağıdaki uzun şifreleri hatasız çözerek altlarına yazın:

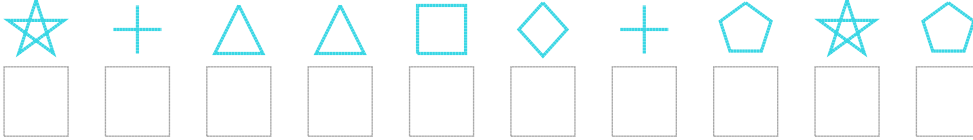
1. Şifre



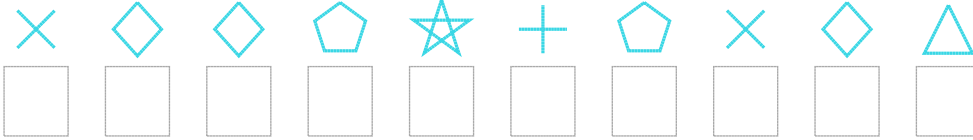
2. Şifre



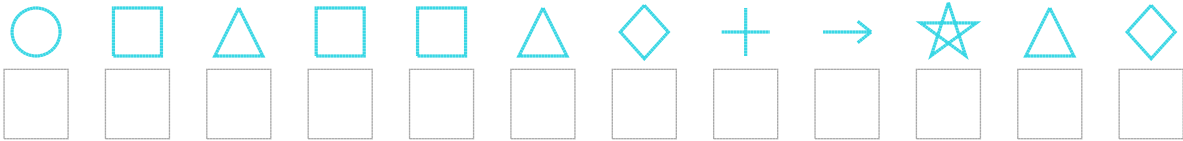
3. Şifre



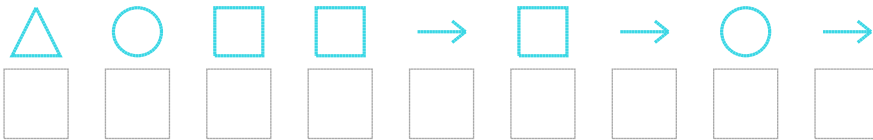
4. Şifre



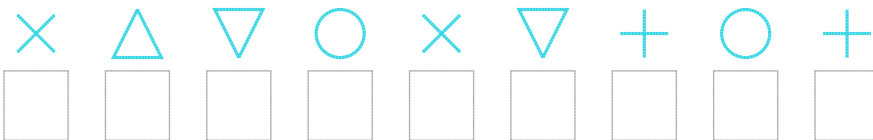
5. Şifre



6. Şifre



7. Şifre



□ BONUS: 6. ve 3. şifrenin üçüncü rakamının toplamı kaçtır?

Cevap Anahtarı

1. Şifre: 0926310233

2. Şifre: 9796496542

3. Şifre: 8500375989

4. Şifre: 4779859470

5. Şifre: 230330756807

6. Şifre: 023363626

7. Şifre: 401241525

□ Bonus Soru Cevabı: 3